









4

Prikkort



100	101	102	103	104	105	106	107	108	109
90			93						99
					85				
		72				76			
				64					69
50			53				57		
	41								
								38	
		22			25				29
10									
0	1			4					

+	3	5	6	7
1				
2				
3		8		
4				11

-	1	2	3	4
4	3			
5			2	
6				
7		5		

## Spørgsmål 16: Talmønstre

- 1, 2, 4, 5, 7, 8, 10, 11 ...
- 2, 2, 4, 4, 6, 6 ...

## Spørgsmål 17: Geometriske mønstre

